



**GREEN VALLEY NATIONAL SCHOOL & PU COLLEGE SHIROOR
WORKSHEET NO.3**

CLASS: I A / B/C

SUBJECT: MATHS

NAME

I. Write the numbers 201 to 300

II. Write the number names 51 to 80

III. Write the backwards numbers from 100 to 1

100									

IV. Write the missing numbers.

a) 245 _____ 247 248 _____ 250

b) 270 _____ _____ 274

c) 218 _____ 220 _____ 222 _____

d) 289 _____ _____ 292 _____ 294

e) 263 _____ 265 _____ 267 _____

XXXXXXX



**GREEN VALLEY NATIONAL SCHOOL & PU COLLEGE SHIROOR
WORKSHEET NO.4**

CLASS: I A / B/C

SUBJECT: MATHS

NAME

I. Write the numbers 301 to 400

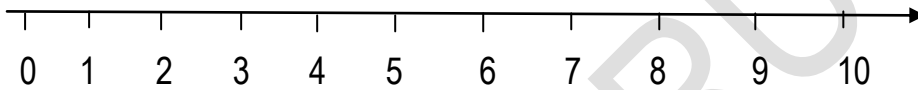
II Write the number names 71 to 100

III. Add the following with carryover

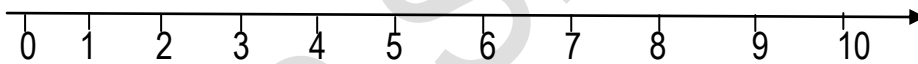
T	O	T	O	T	O	T	O	T	O	T	O
○		○		○		○		○		○	
4	2	3	6	5	9	6	8	7	6	5	8
+3	8	+2	8	+1	7	+2	2	+1	7	+3	5
□	○	□	○	□	○	□	○	□	○	□	○

IV Add on the number line

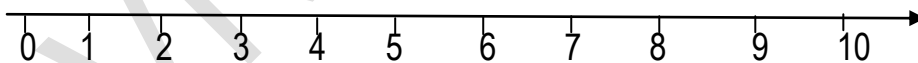
a) $4 + 5 =$



b) $2 + 2 =$



c) $6 + 3 =$



V. Fill in the blanks

- Seven increased by four
- Four and five make
- Two added to six
- The sum of two and three is
- Four added to two is
- Eight plus two equal



GREEN VALLEY NATIONAL SCHOOL & PU COLLEGE SHIROOR
WORKSHEET NO.5

CLASS: I A / B/C

SUBJECT: MATHS

NAME _____

I. Write the numbers in the expanded form

a) $79 = \square + \square$

b) $46 = \square + \square$

c) $33 = \square + \square$

d) $99 = \square + \square$

II. Write in the compact form

$50 + 6 = \square$

$40 + 9 = \square$

$80 + 5 = \square$

$10 + 6 = \square$

$70 + 3 = \square$

$20 + 1 = \square$

III. Write the face value and place value of the underlined numbers

Number

Face value

Place value

13

82

20

55

92

37

III. Write the number names

55 _____

92 _____

39 _____

85 _____

80 _____

13 _____

23 _____

79 _____

IV. Arrange the numbers in ascending order and write the smallest number of each group

a) 30 15 14 45 22

A.O

b) 42 48 43 41 45

A.O

c) 31 90 24 67 52

A.O

V. Write in tens and ones

a) 25 = tens + ones

b) 19 = tens + ones

c) 57 = tens + ones

d) 55 = tens + ones

e) 66 = tens + ones

f) 98 = tens + ones

VI. Write in the numeral form

a) two tens and six ones =

b) nine tens and four ones =

c) three tens and nine ones =

d) four tens and five ones =

e) seven tens and two ones =

f) eight tens and one ones =

XXXXXX



GREEN VALLEY NATIONAL SCHOOL & PU COLLEGE SHIROOR
WORKSHEET NO.5

CLASS: I A / B/C

SUBJECT: ENGLISH

NAME _____

I. Complete the colour names.

R _ D .	P _ _ K
Y _ L _ _ W	O _ A _ GE
G _ E _ N	_ R _ W _
W _ _ TE	_ LU _
_ U _ P _ E	B _ A _ _

II. Read this short story, then choose the correct answer and fill in the blanks.

This is my cat.
My cat is black.
My cat likes to sleep.
My cat likes to eat.
He likes to play!









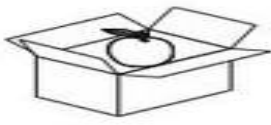
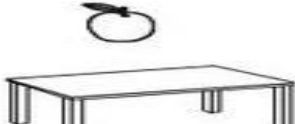
1) My cat is _____

- a) black
- b) red
- c) green

2) He likes to _____

- a) color
- b) sleep
- c) hop

III. Match the following

1. 
2. 
3. 
4. 
5. 
6. 
7. 
8. 

in

under

on

between

above

next to

in front of

behind

IV. Fill in the blanks with am, is, and are

1. We _____ watching television.
2. Rohit _____ a strong boy.
3. It _____ eight o'clock now.
4. She _____ a taxi driver.
5. Cats and dogs _____ pet animals.
6. You _____ late again.
7. My brother _____ a waiter.
8. We _____ good children.
9. My brother and I _____ in the same class.
10. Tom and Jerry _____ cartoon characters.
11. They _____ my parents.
12. He _____ our good neighbour.



**GREEN VALLEY NATIONAL SCHOOL & PU COLLEGE SHIROOR
WORKSHEET NO.4**

CLASS: I A / B/C

SUBJECT: EVS

NAME

I. Name the following

1. Vegetables: _____

2. Fruits : _____

3. Flowers : _____

4. Insects : _____

5. Domestic animals _____

6. Wild animals _____

II. Name the following pictures



III. Answer the following questions

1. Write any one safety rule that we should follow on the road?

Ans: _____

2. Who are neighbours?

Ans: _____

3. What are herbivores? Give examples

Ans: _____

4. What are carnivores? Give examples

Ans: _____

5. What are omnivores? Give examples.

Ans: _____

6. Name any two objects with which we should not play at home.

Ans _____

IV. Tick the correct answer for the following



1. Which of the following vegetable is root?

- a. Banana b. Carrot c. Grapes



2. Which of the following animal is an herbivore?

- a. Cow b. Tiger c. Fish



3. Which of the following animal is an omnivore?

- a. Tiger b. Rabbit c. Goat



4. Which of the following is a water plants?

- a. Lotus b. Mango Tree c. Mint



5. Which of the following vehicles is moving on water?

- a. Boat b. Cycle c. Aeroplane



6. Who treats the sick or injured people?

- a. Fire man b. Gardener c. Doctor



7. Which vehicles are used to take the sick or injured people to the hospital?

- a. Fire engine b. Ambulance c. Crane



8. It is a big ball of fire.

- a. moon b. stars c. su

X. Write the terms.

tamed-

grocery-

adult-

stray-

hazards-

XI. Match the following:

1. creepers

a. cut

2. scissors

b. pumpkin

3. omnivore

c. airport

4. aeroplane

d. bear

5. rainbow

e. water transport

6. Ship

f. seven colours

XXXXXXXXXXXX